




Επανάληψη στις 4 πράξεις!




1. Λύσε προσεκτικά τις πιο κάτω μαθηματικές προτασούλες:

$8 + 8 =$	$10 + 8 =$	$9 + 90 =$
$11 + 8 =$	$6 + 6 =$	$30 + 5 =$
$15 - 8 =$	$55 - 5 =$	$98 - 90 =$
$20 - 8 =$	$14 - 8 =$	$18 - 6 =$



2. Συμπληρώνω τις πιο κάτω μαθηματικές προτασούλες:

$8 + \square = 20$	$15 + \square = 18$	$3 + \square = 12$
$\square + 60 = 63$	$10 + \square = 90$	$\square + 70 = 100$
$19 - \square = 15$	$20 - \square = 11$	$14 - \square = 6$
$\square - 2 = 40$	$\square - 8 = 30$	$\square - 10 = 10$



Όνομα:..... Τάξη:.....

3. Μη μου πεις ότι κουράστηκες... Λύσε και τις πιο κάτω εξισώσεις:



$80 + 20 = \dots$

$70 + 0 = \dots$

$40 + 40 = \dots$

$60 + 20 = \dots$

$30 + 70 = \dots$

$10 + 80 = \dots$

$30 + 30 = \dots$

$20 + 40 = \dots$

$50 + 50 = \dots$

$10 + 90 = \dots$



$80 - 60 = \dots$

$70 - 20 = \dots$

$60 - 50 = \dots$

$30 - 10 = \dots$

$50 - 50 = \dots$


$40 - 20 = \dots$

$90 - 80 = \dots$

$60 - 10 = \dots$

$100 - 60 = \dots$

$90 - 90 = \dots$



$20 + \dots = 60$

$\dots + 40 = 40$

$10 + \dots = 50$

$\dots - 60 = 10$

$100 - \dots = 50$

$60 - \dots = 30$

$50 + \dots = 100$

$\dots - 30 = 10$

$\dots - 50 = 20$

$\dots + 30 = 90$

$3 \times 10 = \dots$

$2 \times 30 = \dots$

$4 \times 20 = \dots$

$10 \times 5 = \dots$

$2 \times 50 = \dots$

$40 \times 0 = \dots$

$2 \times 9 = \dots$

$9 \times 10 = \dots$



$90 \div 9 = \dots$

$80 \div 10 = \dots$

$100 \div 2 = \dots$

$60 \div 2 = \dots$

$40 \div 40 = \dots$

$50 \div 1 = \dots$

$80 \div 8 = \dots$

$16 \div 8 = \dots$

ΕΙΣΤΕ ΤΡΟΜΕΡΟΙ!!!